

HAPPY
SUMMER HOLIDAY
CLASS V ENGLISH
WORKSHEETS

-
1. The plural Form of "scarf" is _____.
 2. The plural form of "fly" is _____.
 3. The plural form of "class" is _____.
 4. The plural form of "tomato" is _____.
 5. The plural form of "watch" is _____.
 6. The plural form of "foot" is _____.
 7. The plural form of "boy" is _____.
 8. The plural form of "mouse" is _____.
 9. The plural form of "box" is _____.
 10. The plural form of "woman" is _____.
 11. The plural form of "friend" is _____.
 12. The plural form of "tooth" is _____.
 13. The plural form of "child" is _____.
 14. The plural form of "church" is _____.



Remember, nouns are words that name things.

An **abstract** noun is a thing that you cannot see, touch, taste, hear or smell.

Colour the ghosts that have an **abstract** noun in the speech bubble.

hope



car



hate



jam



Complete these sentences by using the abstract nouns shown.

fear

honesty

trust

anger

1. The cat had a great of the sea water.
2. Tom felt a lot of when his phone was stolen.
3. The teacher had the of all the young children.
4. Tom showed great when returning the lost money.

Write two sentences of your own using an abstract noun.



Rearrange Jumbled Sentences

Q. Rearrange the following words to make a sentence.

1. soccer / He plays / his friends / with

.....

2. for us / cooks / dinner / She

.....

3. shoes / I wear / comfortable

.....

4. often go / We / library / to the

.....

5. sandwiches / for breakfast / eat / They

.....

6. of leather / The jacket / was made

.....

7. sipped / some water / The sparrow

.....

8. the computer / is working on / My neighbor

.....

9. our gratitude / to show / We have / to them

.....

Types of Sentences

Write the correct punctuation mark at the end of each sentence. Then identify each sentence as **declarative**, **interrogative**, **exclamatory**, **imperative**.

1. Invertebrates are animals without a backbone _____



2. What are the three main groups of mollusks _____



3. Conch salad and conch fritters are very tasty _____



4. A tentacle is an arm-like part that contains the stinging cells _____

5. Get out of the water, I see jellyfish nearby _____

6. There are many text features in a non-fiction book _____

7. Name a few text features for me please _____

8. Why are text features important _____

9. Crustaceans have an outer skeleton that protects their bodies _____

COLLECTIVE NOUNS

LOAF
SCHOOL
BUNCH
ARMY
TROUPE

LITTER
FLOCK
CHOIR
GANG
PILE

1. A _____ OF FISH.
2. A _____ OF KITTENS.
3. A _____ OF BOOKS.
4. A _____ OF DANCERS.
5. A _____ OF SHEEP.
6. A _____ OF SINGERS.
7. A _____ OF GRAPES.
8. AN _____ OF SOLDIERS.
9. A _____ OF BREADS.
10. A _____ OF THIEVES.

Q 1 Read the passage and answer the following questions:

On that day, the sun shone bright, and all the children were wild with excitement. They crowded into the train and sat down but nobody wanted to sit next to Hari because he always pinched. When they arrived at the seaside, all the children jumped out with a shout of joy. Down to the sands they raced, hand in hand - but nobody took Hari's hand. Nobody went near him. Hari was angry. He went to a sandy corner near a rocky pool and sat down by himself. He took out his lunch and looked at it. It was a good lunch. There were two hard boiled eggs, six jam sandwiches, three pieces of bread and butter, a ginger cake, and a bar of chocolate.

a. Why nobody wanted to sit next to Hari?

b. Where did they go for picnic?

c. Did anybody take Hari's hand?

d. What did he bring for lunch?

e. Pick out opposite from the passage:

dull - _____

soft - _____

f. Write plural of the following:

child- _____

sandwich - _____

आर्मी पब्लिक स्कूल कंदरोड़ी (2024-25)

ग्रीष्मावकाश कार्य पत्रिका

विषय - हिन्दी

कक्षा -पाँचवीं

नाम अनुक्रमांक वर्ग

..... हस्ताक्षर

निर्देश - सभी प्रश्नों को ध्यान से पढ़ें व सुंदर लिखाई में उत्तर लिखें।

वर्तनी(spellings) का विशेष ध्यान दें।

सभी उत्तर याद करके ही लिखें।

1 अपठित गद्यांश -----

एक तपती दोपहर, सुमन और उसके दोस्तों ने पास के जंगल घूमने का फैसला किया। उन्होंने अपने साथ खाने के लिए कुछ नाश्ता रखा, अपनी लंबी पैदल यात्रा के लिए जूते पहने, और अपने साहसिक कार्य पर निकल पड़े। जैसे ही उन्होंने जंगल में प्रवेश किया, ऊंचे पेड़ों और पक्षियों की मधुर चहचहाहट ने उनका स्वागत किया। उन्होंने एक संकरी पगडंडी पर जाने का निर्णय लिया जो उन्हें जंगल में और अंदर ले गई। सुमन ने रास्ते में खिले हुए रंग-बिरंगे जंगली फूलों को देखा। अचानक उन्हें सरसराहट की आवाज सुनाई दी। उन्होंने पीछे मुड़कर देखा तो झाड़ियों के बीच से एक हिरण शालीनता से उछल रहा था। उत्साह से, उन सबने अपनी खोज जारी रखी और एक ठंडे पानी के झरने के पास आ गए। उन्होंने अपने पैरों को ठंडे पानी में डुबोया और एक-दूसरे पर चंचलता से छींटे मारे। कुछ देर आराम करने के बाद, वे अपने वन भ्रमण की साहसिक यादों को संजोते हुए और अपने ऊपर गर्व महसूस करते हुए घर वापस आ गए।

क	सुमन और उसके दोस्तों ने कहाँ घूमने का फैसला किया?	
उत्तर	<hr/> <hr/> <hr/> <hr/> <hr/> <hr/> <hr/> <hr/>	
ख	सुमन ने जंगल में प्रवेश करते ही क्या सुना ?	
उत्तर	<hr/> <hr/> <hr/> <hr/> <hr/> <hr/> <hr/> <hr/>	
ग	उन्होंने रास्ते में क्या देखा?	
उत्तर	<hr/> <hr/> <hr/> <hr/> <hr/> <hr/> <hr/> <hr/>	
घ	जब उन्होंने अपनी खोज जारी रखी तो उन्होंने क्या पाया ?	
उत्तर	<hr/> <hr/> <hr/> <hr/> <hr/> <hr/> <hr/> <hr/>	

	<hr/> <hr/> <hr/>	
ड.	सुमन और उसकी सहेलियों को उनके साहसिक कार्य के बारे में कैसा लगा?	
उत्तर	<hr/> <hr/> <hr/> <hr/> <hr/>	
2	<p>निम्नलिखित शब्दों के अर्थ लिखो ----</p> <p>छल गायन</p> <p>दयानिधे शुचि</p> <p>अभाव..... खोखली</p> <p>तुच्छ उलीचना</p>	
3	निम्नलिखित प्रश्नों के उत्तर लिखें ----	

क	कवि किन दुर्गुणों से दूर रहना चाहता है ?	
उत्तर	<hr/> <hr/> <hr/> <hr/> <hr/> <hr/> <hr/> <hr/> <hr/> <hr/>	
ख	हम अपने देश के लिए क्या कर सकते हैं ?	
उत्तर	<hr/> <hr/> <hr/> <hr/> <hr/> <hr/> <hr/> <hr/> <hr/> <hr/>	
ग	जीवन को सफल बनाने के लिए क्या करना होगा ?	
उत्तर	<hr/>	

	<hr/> <hr/> <hr/> <hr/> <hr/> <hr/> <hr/> <hr/> <hr/> <hr/>	
घ	बिसिमल्ला खां के बारे में कुछ पंक्तियाँ लिखें ?	
उत्तर	<hr/> <hr/> <hr/> <hr/> <hr/> <hr/> <hr/> <hr/> <hr/> <hr/>	
ड .	धरती की प्यास किसने बुझाई और धरती की प्यास बुझने पर क्या हुआ ?	
उत्तर	<hr/> <hr/>	

	<hr/> <hr/> <hr/> <hr/> <hr/> <hr/> <hr/> <hr/>	
घ	नगर में अकाल पड़ने पर क्या स्थिति थी ?	
उत्तर	<hr/> <hr/> <hr/> <hr/> <hr/> <hr/> <hr/> <hr/>	
ड .	घर छोड़ते समय लोग क्यों झिझकते और सोचते हैं ? क्या उन्हें ऐसा करना चाहिए ?	
उत्तर	<hr/> <hr/> <hr/> <hr/> <hr/> <hr/> <hr/> <hr/>	

4	मूल्यपरक प्रश्न - संगीत हममें किन-किन गुणों का विकास करता है ?	
	<hr/> <hr/> <hr/> <hr/> <hr/> <hr/> <hr/> <hr/> <hr/> <hr/>	
5	सही उत्तर के सामने (✓) का निशान लगाएँ -----	
क	फूंक से बजाए जाने वाले वाद्य यंत्रों में सबसे प्रसिद्ध क्या है ?	
i	शहनाई	<input type="checkbox"/>
ii	बाँसुरी	<input type="checkbox"/>
iii	सितार	<input type="checkbox"/>
ख	तबला कहाँ अधिक प्रचलित है ?	
i	दक्षिण भारत में	<input type="checkbox"/>
ii	उत्तर भारत में	<input type="checkbox"/>
iii	अमेरिका में	<input type="checkbox"/>

<p>ग</p> <p>i</p> <p>ii</p> <p>iii</p>	<p>कवि कैसा जीवन जीना चाहते हैं ?</p> <p>कवि शुद्ध और सरल जीवन जीना चाहते हैं </p> <p>कवि दुख भरा जीवन जीना चाहते हैं </p> <p>कवि निरोगी जीवन जीना चाहते हैं </p>	<p><input type="checkbox"/></p> <p><input type="checkbox"/></p> <p><input type="checkbox"/></p>
<p>घ</p> <p>i</p> <p>ii</p> <p>iii</p>	<p>'अंगारा' का अर्थ है -</p> <p>दहकता कोयला</p> <p>आग</p> <p>आना</p>	<p><input type="checkbox"/></p> <p><input type="checkbox"/></p> <p><input type="checkbox"/></p>
<p>ड .</p> <p>i</p> <p>ii</p> <p>iii</p>	<p>सेठ धर्मपाल को अकाल के अलावा दूसरी चिंता क्या थी ?</p> <p>राज्य का कर चुकाने की</p> <p>बच्चों की शिक्षा</p> <p>भूख -प्यास से व्याकुल पक्षियों की</p>	<p><input type="checkbox"/></p> <p><input type="checkbox"/></p> <p><input type="checkbox"/></p>
<p>च</p> <p>i</p> <p>ii</p> <p>iii</p>	<p>बूँद लौं कुछ और ही देता है कर से तात्पर्य है -</p> <p>घर से बाहर आ जाना</p> <p>विशिष्ट बना देना</p> <p>सीपी बन जाना</p>	<p><input type="checkbox"/></p> <p><input type="checkbox"/></p> <p><input type="checkbox"/></p>
<p>6</p>	<p>लिंग बदलो -</p> <p>शेर अध्यापक</p> <p>लेखक चूहा</p> <p>पुत्र हलवाई</p> <p>बालक ठाकुर</p>	

7	<p>वचन बदलो –</p> <p>मेज़ तिथि</p> <p>लता पंक्ति</p> <p>कविता चुहिया</p> <p>आँख दवाई</p>	
8	<p>विलोम लिखें –</p> <p>अंत अपना</p> <p>अँधेरा असली</p> <p>आकाश आदान</p> <p>आलस आशा</p>	
9	<p>वाक्यांश के लिए एक शब्द लिखो –</p>	

	<p>जो लकड़ी का काम करे</p> <p>जो अभिनय करे</p> <p>जो विदेश में बस गया हो</p> <p>जो सुन नहीं सकता</p> <p>जो बोल नहीं सकता</p>	
10	<p>दो-दो पर्यायवाची लिखें –</p> <p>अतिथि--.....,</p> <p>अध्यापक--.....,</p> <p>आँख -.....,</p> <p>आकाश-.....,</p> <p>आग -,</p>	
11	<p>उचित स्थान पर अनुस्वार या अनुनासिक लगाकर शब्द दोबारा लिखें –</p> <p>चादनी मखिया</p> <p>पहुच दवाइया</p> <p>अकुर पक्तिया</p> <p>अग्रेज़ी तिथिया</p> <p>व्यंजन अग्रेज़ी</p> <p>बास क्योकि</p>	

12	सही जोड़े बनाएँ ----- मणिपुर कश्मीरी कश्मीर मणिपुरी बंगाल असमिया असम बंगाली गुजरात पंजाबी भारत गुजराती पंजाब हिंदी जर्मनी अंग्रेजी इंगलैंड जर्मनी	
13	दिए गए शब्दों के लिए सामासिक शब्द लिखो -	
क	पाठ के लिए शाला - _____	
ख	देश और विदेश - _____	
ग	गंगा का तट - _____	
घ	कार्य में कुशल - _____	
14	रिक्त स्थान भरें -	
क	भारतीय संविधान मेंभाषाओं को मान्यता दी गई है।	
ख	संस्कृत की लिपि है।	

	<hr/> <hr/> <hr/> <hr/> <hr/> <hr/> <hr/> <hr/> <hr/> <hr/> <hr/> <hr/> <hr/> <hr/> <hr/> <hr/>	
16	रंग लाते हैं जीवन में ये त्यौहार और पर्व अनुच्छेद लिखें ।	
	<hr/> <hr/> <hr/> <hr/> <hr/> <hr/> <hr/> <hr/> <hr/> <hr/> <hr/> <hr/> <hr/> <hr/>	

	<hr/> <hr/> <hr/> <hr/> <hr/> <hr/> <hr/> <hr/>	
--	---	--

HAPPY
SUMMER HOLIDAY
CLASS 5 (MATHS)
Holidays homework

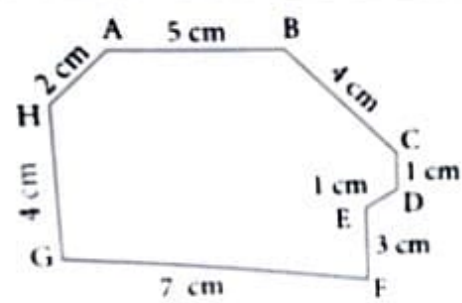
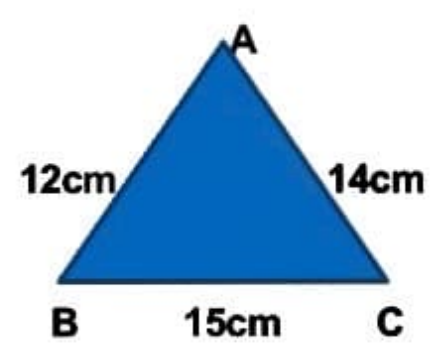


**ARMY PUBLIC SCHOOL, KANDRORI
WORKSHEET**

CLASS- V

SUB-MATHS

Q1	What is the difference of XXIII and XXVII? (a) IV (b) V (c) LXIII (d) CX
Q2	How many times 50 is 3500? (a) 80 (b) 70 (c) 88 (d) 7
Q3	Find the product of 87 X 5000:- (a) 435000 (b) 10000000 (c) 445000 (d) 43500
Q4	The Place value of 6 in 550365 is: (a) 30 (b) 60 (c) 120 (d) 180
Q5	50000000 is 1 more than: (a) 49999999 (b) 50000000 (c) 4999999 (d) 499999
Q6	The difference of greatest number of 6 digits and the least number of 7 digits is: (a) 1 (b) 10099 (c) 899999 (d) 1999999
Q7	Round off 18 X 184 to nearest tens and estimate the product: (a) 3600 (b) 4000 (c) 3500 (d) 3312
Q8	The number which can be repeated three times is (a) L (b) V (c) M (d) D
Q9	100 million is equal to (a) 10 lakhs (b) 1 crore (c) 10 crore (d) 100 crore
Q10	Which among the following is the smallest? (a) XLIX (b) LXIX (c) LXXV (d) XCIX
Q11	Form the greatest and the smallest 8-digit numbers using each of the digits 5,1,9,0 twice.
Q12	Fill in the blanks with suitable Roman numerals. a) XXII + IX = _____ b) LXV - IX = _____
Q13	Two school libraries have 2118345 and 2139874 books respectively. How many more books should be bought so that the total number of books in the two libraries become 36124578?
Q14	A bag contains 150 kg wheat. A truck can carry 883 bags of wheat in it. How much wheat will 95 trucks carry?

Q15	If a notebook has 125 pages with each page having 27 lines. How many lines are there in the notebook?	
Q16	Write the following numbers in expanded form: a) 665656 b) 5072109 c) 439074	
CASE STUDY BASED QUESTIONS		
Q17	A private school had 73450 books in the library. The school management donated 17345 books to a school in rural area. a) Find the number of books left in the library. b) What value is depicted by the management of school?	
Q18	In the adjacent figure , find the distance in centimetres: a) Find $AB + BC$ b) From A to F through H and G c) Find $DE + EF + FG$	
Q19	Students of a class were asked to pick three strips from a box of Roman numerals. Three students picked up the following strips: Rafiq — V,X,L Dolly — I,L,C Satinder — V,X,I The teacher asked them to write all possible numbers that they can form using these strips. Can you guess: a) the largest number? b) the smallest number? c) who will make the greatest number?	
Q20	Based on the data shown at the right, Meera wants to add cloth-line in her backyard. How many centimetres of rope are needed to connect: (Round off the answer to nearest tens) a) From post A to post C. b) From post B to post C.	

ANSWERS

1	a
2	b
3	a
4	b
5	a
6	a
7	a
8	c
9	c
10	a
11	99551100,10015599
12	XXXI, LVI
13	31866359
14	8609250 KG
15	3375 Lines
16	Do it yourself
17	a) 56105 books b) Social responsibility
18	a) 9cm b) 13cm c) 11cm
19	a) CLI b) XIV c) Dolly
20	a) 10cm b) 20 cm

WORKSHEET

CLASS-V

SUB-EVS

1 Case study-

Read the paragraph and answer the following questions:

There are many games in India which are played at the local level. Most of the local sports are played traditionally in different parts of the country. Some of the traditional games that developed in India are Chopat, Kho-Kho, Hopscotch, Chess, Archery, etc . Martial arts is a system of fighting techniques that can be used in war, self defence or even for entertainments. Some famous Indian martial arts are Mardani Khel of Maharashtra, Thang ta of Manipur, Kalaripayattu of Kerala and Silambam of Tamil Nadu.

1. Name three local games of India.

2. What is martial arts?

3. Name any three types of martial arts.

2 The main organs of respiratory system are nose, windpipe and lungs. We breathe in air through our nose. The tiny hair inside nose trap the dust to prevent it to enter the body. The air we breathe becomes warm in our nose. It goes through the windpipe into a pair of bag-like structure located in our chest called lungs. The lungs are protected by ribcage which consists of 12 pairs of curved bones called the ribs. The ribcage also protects the heart. A strong muscular organ called diaphragm lies below the heart. It helps in contraction and relaxation of lungs.

1. What is the main function of the following:-

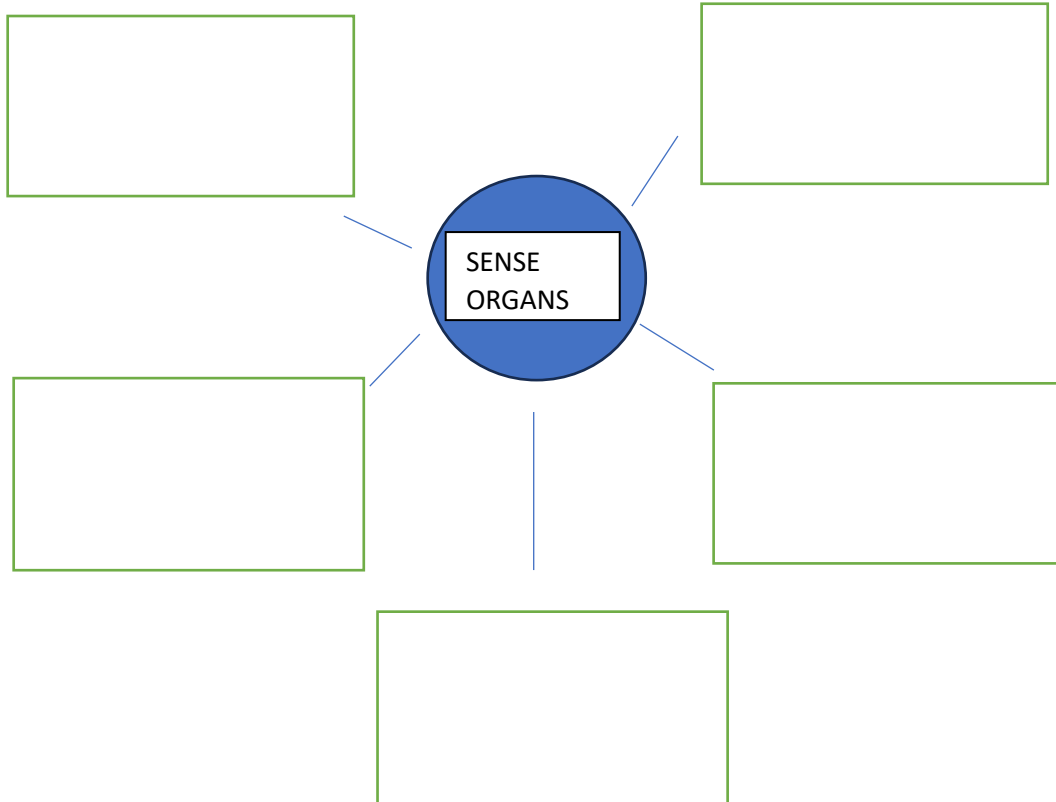
Hair in the nose- _____

Diaphragm - _____

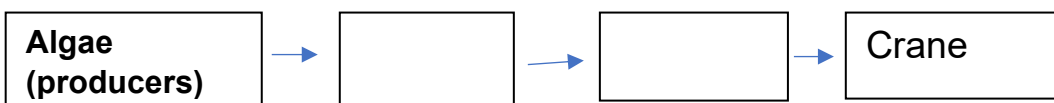
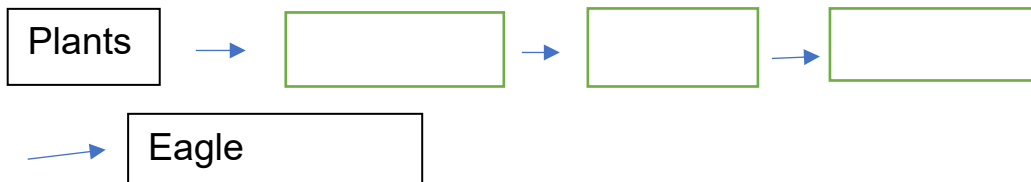
2. Write one function of ribs.

3. Name the main organs of respiratory system.

3 Complete the following: - Write name of the sense organs and their functions.



4 Complete the following food chains-



5 Give reasons for the following-

1. Why do we blow air on a hot glass of milk?

2. The left lung is smaller than the right lung.

6 Name the following-

- a. People who go and settle in other countries. _____
- b. An individual sport. _____
- c. A white collar job. _____
- d. The process of breathing in air. _____
- e. The process of breathing out air from lungs. _____
- f. A traditional sport of Kerala. _____
- g. A team game. _____
- h. He coined the term 'Harijan' for untouchable. _____
- i. Sleeps with open eyes _____
- j. Have eyes on either side of head. _____
- k. Makes flashes of light. _____

7 Identify the following:-





8 Test your knowledge-

1. Name any three factors which affect our choices.

2. Write the name of any two vegetarian food items which smell and do not liked by all?

3. How many players are there in the following teams?

Hockey –

Football –

Basketball-

Cricket-

Volleyball-

4. Name any 3 Olympic medal winners of India.

5. Name two birds of prey.

8 Draw and label the following

1. The respiratory system of human beings .

2. Our sense organs.

Worksheet

1. Tick the correct answer

- _____ is known as the father of computer.
(a) Blaise Pascal (b) Charles Babbage (c) Herman Hollerith
- The _____ generation computers are based on artificial intelligence.
(a) first (b) third (c) fifth
- The second generation computer used _____.
(a) transistors (b) Vacuum tube (c) IC
- The first calculating device was _____.
(a) Napier's bone (b) Abacus (c) Pascaline
- A group of files stored under a common name is called a _____.
(a) file (b) cupboard (c) Folder
- Deleted files go into _____.
(a) Music folder (b) recycle bin (c) Desktop
- Selected files appear _____ on our screen.
(a) Highlighted (b) flashing (c) Colourful
- The document we create is called a _____.
(a) folder (b) file (c) text

2. Write T for True And F for False statements.

- Early man used to count with the help of stones, fingers, etc.
- Mark I was the first electro-mechanical computer.
- IC are used in the fourth generation of computer.
- 3rd generations of computer used vacuum tube.
- A file is a collection of data and information.
- A file can have any number of folders in it.
- A file and folder are represented with the same name.

3. Fill in the blanks.

- Abacus was invented by the _____.
- _____ invented the difference engine and analytical engine.

3. _____ was invented by Blaise Pascal in 1642.
4. A computer represents files and folders with _____.
5. File explorer is divide into _____ and _____ panes.
6. we can press _____ keys to select all flies and folders.

4. Differentiate between the followings.

File	folder
Coping file	Moving file.
3rd generation	1 st generation
4the generation	5 th generation